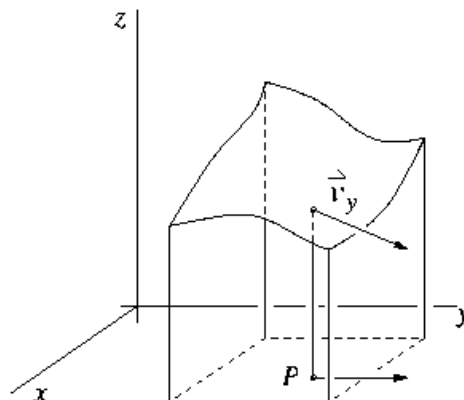


- I. For the following integral, sketch the region of integration and change the order of integration. The answer (5) should have two terms.  $\int_0^1 \int_{2x}^{4x} f(x, y) dy dx$

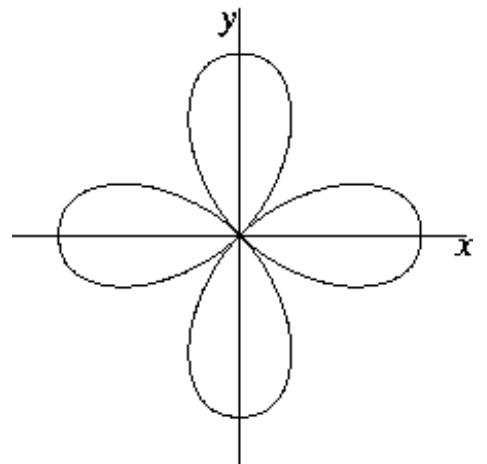
- II. For the rectangle  $R = [0, 1] \times [0, 2]$ , calculate  $\iint_R \frac{xy}{\sqrt{1+x^2+y^2}} dA$ . (4)

- III. The figure to the right shows the portion of the graph of a certain function  $f(x, y)$ , and a certain point  $P$  in the domain of  $f$ . Also shown are the vector  $\vec{j}$ , located at  $P$ , and a vector  $\vec{v}_y$  tangent to the surface at the point directly above  $P$ . Suppose that  $f_x$  has the value  $-0.67$  at  $P$  and  $f_y$  has the value  $-0.65$ . Find  $a$ ,  $b$ , and  $c$  so that  $\vec{v}_y = a\vec{i} + b\vec{j} + c\vec{k}$ .



- IV. Calculate  $\int_0^1 \int_0^z \int_0^y z e^{-y^2} dx dy dz$ .  
(4)

- V. The figure to the right shows the graph of the polar equation  $r = \cos(2\theta)$ . Use a double integral in polar coordinates to calculate the area contained inside each one of its loops. You might need to use the identity  $\cos^2(x) = \frac{1}{2} + \frac{1}{2} \cos(2x)$ .  
(5)



- VI. Sketch the region in the first octant bounded by the three coordinate planes and the plane  $x + y + z = 1$ .  
(4) Write a triple integral whose value is the volume of this region. Supply limits of integration, but *do not* carry out the calculation to evaluate the integral.

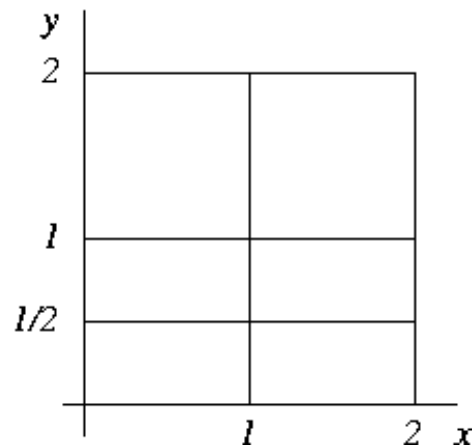
- VII.** Find the mass of the upper hemisphere  $E$  given by  $x^2 + y^2 + z^2 = a^2$ ,  $z \geq 0$  if the density function is  $z$ . In  
(5) spherical coordinates,  $x = \rho \cos(\theta) \sin(\phi)$ ,  $y = \rho \sin(\theta) \sin(\phi)$ ,  $z = \rho \cos(\phi)$ , and  $dV = \rho^2 \sin(\phi) d\rho d\phi d\theta$ .

- VIII.** State the Fundamental Theorem of Calculus (without hypotheses, just the formula). Calculate

(4) 
$$\frac{\partial}{\partial y} \int_0^{x^2 y^2} \sin^{100}(t^2) dt.$$

- IX.** Evaluate  $\iiint_E \sqrt{x^2 + y^2} dV$ , where  $E$  is the region that lies inside the cylinder  $x^2 + y^2 = 4$  and between  
(4) the planes  $z = -1$  and  $z = 2$ . Use cylindrical coordinates, so that  $\sqrt{x^2 + y^2} = r$ .

- X.** Use a Riemann sum for this partition of the rectangle  $R = [0, 2] \times [0, 2]$  to estimate  $\iint_R \sqrt{x^2 + y^2} dA$ , choosing as the sample points the points closest to the origin. Leave the Riemann sum as an unsimplified sum of terms, possibly involving square roots.
- (4)



- XI.** Consider a lamina that occupies the region of the unit disk in the  $xy$ -plane. Suppose that the density at each point is proportional to the square of the distance from the point to the origin. Write an expression for the density function  $\rho$  in polar coordinates, and use it to find the mass of the lamina.
- (5)

- XII.** Consider the paraboloid  $z = x^2 + y^2$  and the saddle surface  $z = x^2 - y^2$ . Tell how one can know that if  $D$  is any domain in the  $xy$ -plane, then the areas of the portions of these two surfaces having their  $(x, y)$  coordinates in  $D$  are equal.
- (4)